

Mapping the Northern States

1. STATES

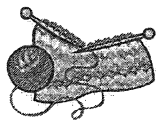
Locate and label the following states:

Maine	Vermont	New Hampshire	Rhode Island
Massachusetts	Connecticut	New York	Pennsylvania
New Jersey	Delaware	Ohio	Michigan
Indiana	Illinois	Wisconsin	Iowa
Minnesota			

***color each state a different color, no two colors touching and NO BLUE.**

2. INDUSTRIES

Use the following symbols and label them on the map. Use the same symbols and create a key in the space provided.



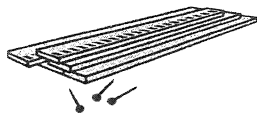
Textiles



Iron and Steel



Mining



Lumber



Cattle



Grain

3. TRUE or FALSE

Answer the following questions using your map as a guide.

- A. True or False Most of the states around the Great Lakes had lumber industries.
- B. True or False The mining industry probably had an important impact on Michigan's economy.
- C. True or False Cattle herds were raised mainly in the New England states.
- D. True or False New Jersey and Delaware had iron and steel industries.
- E. True or False Textiles were produced mainly in states along the Atlantic coast.

4. CRITICAL THINKING

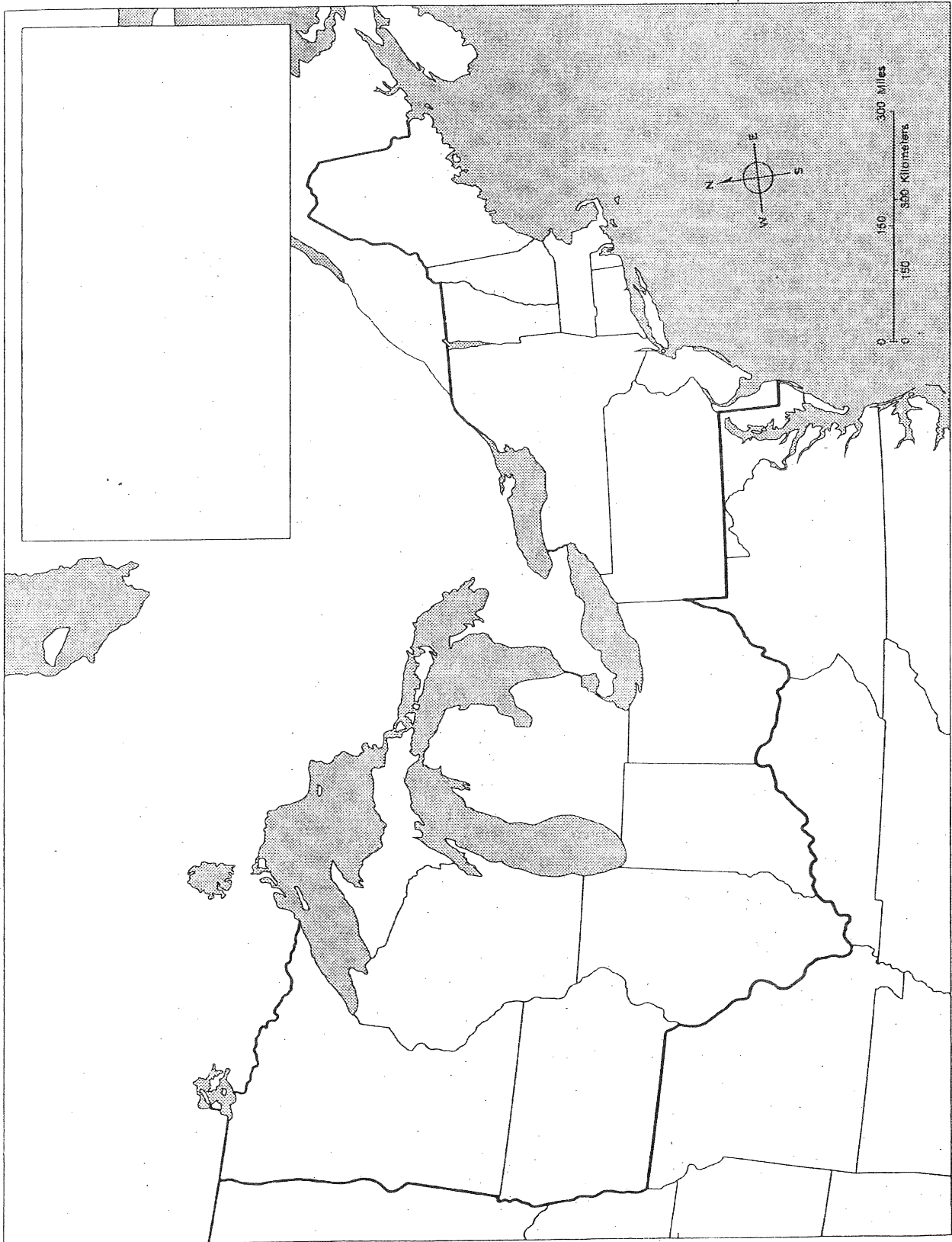
Answer the following questions using your map as a guide.

- F. How did local geography affect the development of the industries shown on your map?
- G. How do you think the types of industries that flourished in the North influenced the lifestyle there?

Name _____

Date _____

43 The Northern States



Mapping the Southern States

1. STATES

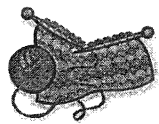
Locate and label the following states:

Maryland	Virginia	Kentucky	North Carolina
South Carolina	Tennessee	Georgia	Alabama
Mississippi	Missouri	Arkansas	Louisiana
Texas	Florida		

***color each state a different color, no two colors touching and NO BLUE.**

2. INDUSTRIES

Use the following symbols and label them on the map. Use the same symbols and create a key in the space provided.



Textiles



Iron and Steel



Mining



Lumber




Cattle



Grain



Cotton



Tobacco



Rice and Sugar

3. TRUE or FALSE

Answer the following questions using your map as a guide.

- A. True or False Cotton was a major industry in Kentucky.
- B. True or False Cattle was a major industry in Texas.
- C. True or False Tobacco was raised mainly in the western states.
- D. True or False Rice and sugar can were not grown in the south.
- E. True or False Mining was not part of the southern industries.

4. CRITICAL THINKING

Answer the following questions using your map as a guide.

- F. How does the map support the statement: "Cotton was king in the South"?
- G. Compare the map on Page 375 to this one. How do the economies of the North and South differ?



44 The Southern States

Name _____

Date _____